

**REINFORCEMENT**

I. Describe the given picture in your own words.



---

---

---

---

---

---

---

---

**II. Read the passage carefully and answer the given questions.**

Scientists know many things about the sun. They know how old it is. The sun is more than 4 ½ billion years old. They also know the sun's size. The sun may seem small, but that is because it is very far away from the earth. It is about 93 million miles away from the earth. The sun is so large that the diameter of the sun is 109 times the earth's diameter. The sun also weighs as much as 333,000 of the earth. The sun is the centre of our solar system. Besides the sun, the solar system is made up of the planets, moon, asteroid belts, comets, meteors and other objects.

Q1. How old is the sun?

A. \_\_\_\_\_

Q2. Why does the sun seem small?

A. \_\_\_\_\_

Q3. What is the centre of the solar system?

A. \_\_\_\_\_

Q4. What is the solar system made up of?

A. \_\_\_\_\_

Q5. Give an appropriate title to the passage.

A. \_\_\_\_\_



# SRI VAMSHIDHAR HIGH SCHOOL

Academic Year (2020-2021)

Worksheet

**Class-5: Hindi**

**Day-28**

**Date:02.05.2020**

I. निम्नलिखित शब्दों के पर्यायवाची शब्द लिखिए -

- (क) पानी - -----
- (ख) घर - -----
- (ग) आँख - -----
- (घ) वृक्ष - -----
- (ङ) स्कूल - -----

II. निम्नलिखित वाक्यांश के लिए एक शब्द लिखिए -

- (क) जो पढ़ा - लिखा न हो - -----
- (ख) जो पढ़ाता है - -----
- (ग) जो नया न हो - -----
- (घ) जो दूध - दही बेचती है - -----
- (ङ) चित्र बनाने वाला - -----



# SRI VAMSHIDHAR HIGH SCHOOL

Academic Year (2020-2021)

Worksheet

Class-5: Telugu

Day-28

Date:02.05.2020

సరైన భాషాభాగాలతో కింది ఖాళీలు పూరించండి.

- 1) సింహం గర్జిస్తుంది . \_\_\_\_\_ అడవిలో ఉంటుంది.
- 2) పోతన భాగవతం రాశాడు . \_\_\_\_\_ సహజ పండితుడు.
- 3) సుమిత్ర వంట బాగా చేస్తుంది . \_\_\_\_\_ పాట \_\_\_\_\_ పాడుతుంది.
- 4) గోపాల్ పాఠం \_\_\_\_\_.
- 5) \_\_\_\_\_ చెట్టు మీద కూర్చున్నది.

ప్ర : సర్వనామం అనగానేమి ? కొన్ని ఉదాహరణలు రాయండి.

జ :

---

---

---

---

---

---

---

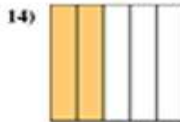
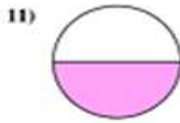
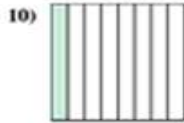

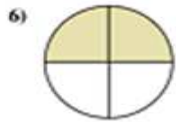


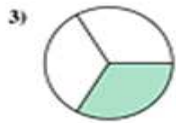
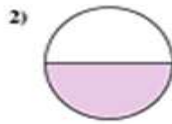
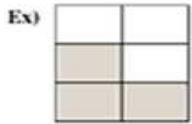
---

**Class-5: Mathematics**

**Day-28**

**Date:02.05.2020**

**I. Write the shaded part in the word form.**



**Answers**

Ex. **Three-fifths**

1. \_\_\_\_\_

2. \_\_\_\_\_

3. \_\_\_\_\_

4. \_\_\_\_\_

5. \_\_\_\_\_

6. \_\_\_\_\_

7. \_\_\_\_\_

8. \_\_\_\_\_

9. \_\_\_\_\_

10. \_\_\_\_\_

11. \_\_\_\_\_

12. \_\_\_\_\_

13. \_\_\_\_\_

14. \_\_\_\_\_

**II. Write the numerator (N) and denominator (D) of the following fractions.**

a)  $\frac{12}{5}$ ; N= \_\_\_\_\_, D= \_\_\_\_\_.

b)  $\frac{1}{9}$ ; N= \_\_\_\_\_, D= \_\_\_\_\_.

c)  $\frac{7}{15}$ ; N= \_\_\_\_\_, D= \_\_\_\_\_.

d)  $\frac{5}{9}$ ; N= \_\_\_\_\_, D= \_\_\_\_\_.

e)  $\frac{18}{15}$ ; N= \_\_\_\_\_, D= \_\_\_\_\_.

f)  $\frac{8}{11}$ ; N= \_\_\_\_\_, D= \_\_\_\_\_.



# SRI VAMSHIDHAR HIGH SCHOOL

Academic Year (2020-2021)

Worksheet

**Class-5: EVS**

**Day-28**

**Date:02.05.2020**

## **World Environment Day**

**1.** Collect information on World Environment Day.

**i.** World Environment Day is celebrated on \_\_\_\_\_.

**ii.** World Environment Day is celebrated because

\_\_\_\_\_  
\_\_\_\_\_.

**iii.** World Environment Day was established by the \_\_\_\_\_ in the year

\_\_\_\_\_.

**iv.** The first World Environment Day was celebrated in the year \_\_\_\_\_.

**v.** The theme of World Environment Day 2017 was \_\_\_\_\_.

**vi.** The host country of World Environment Day 2017 was

\_\_\_\_\_.

**vii.** The host country of the next World Environment Day is

\_\_\_\_\_.

**viii.** The theme of the World Environment Day 2019 is

\_\_\_\_\_.

**2.** Make a poster on '**Save Environment**'